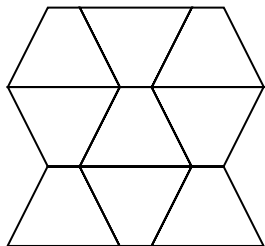


## Skills Practice


### Tessellations

Identify the figures used to create each tessellation. Then identify the tessellation as regular, semi-regular, or neither.

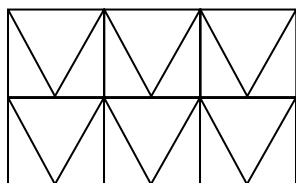
1.



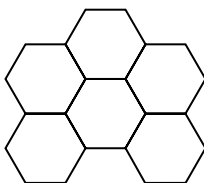
2.



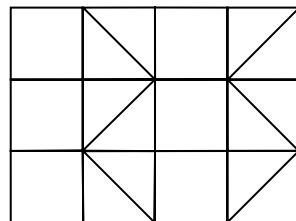
3.



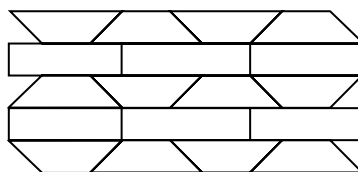
4.



5.



6.



Create a tessellation using the given polygons.

7. right triangles

8. equilateral triangles and rhombi