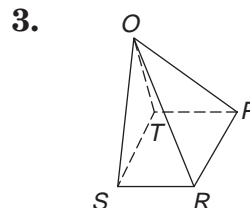
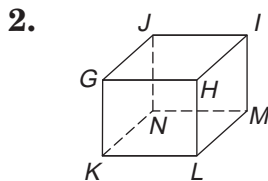
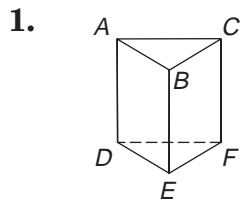


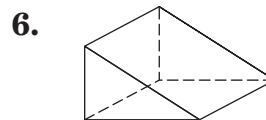
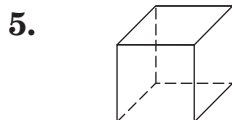
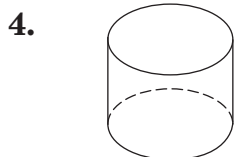
## Skills Practice

### Solid Figures

Name the faces, edges, and vertices of each polyhedron.



Name each solid.



Determine whether each statement is true or false for the solid.

7. The figure is a prism.
8. The base of the figure is a pentagon.
9. There are five lateral faces.
10. The figure has 6 edges.

