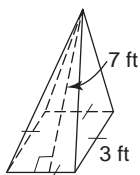


## Skills Practice

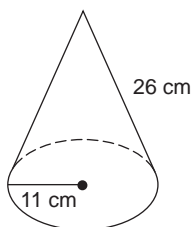
### Surface Areas of Pyramids and Cones

Find the lateral area and the surface area of each regular pyramid or cone. Round to the nearest hundredth, if necessary.

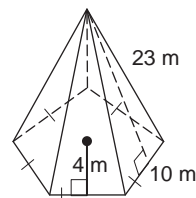
1.



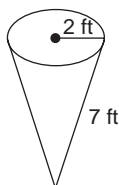
2.



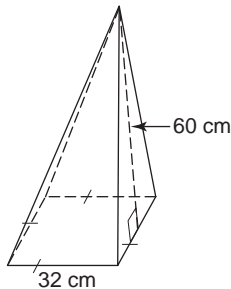
3.



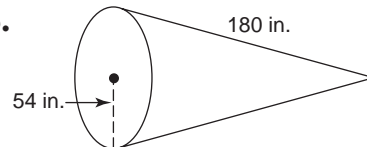
4.



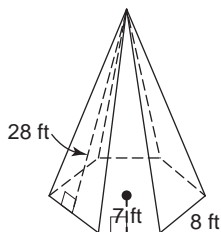
5.



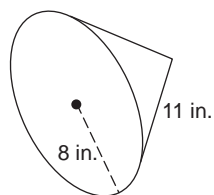
6.



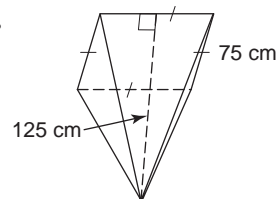
7.



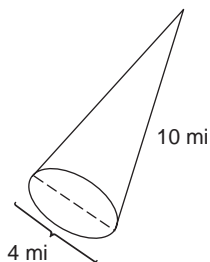
8.



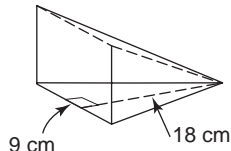
9.



10.



11.



12.

