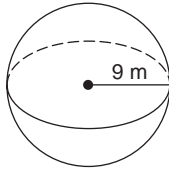


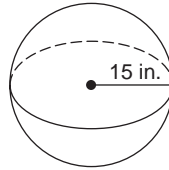
**Skills Practice****Spheres**

Find the surface area and volume of each sphere. Round to the nearest hundredth.

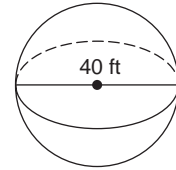
1.



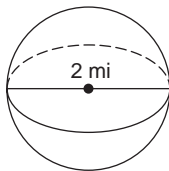
2.



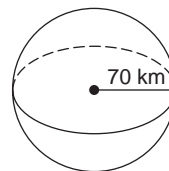
3.



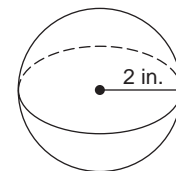
4.



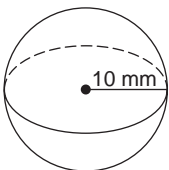
5.



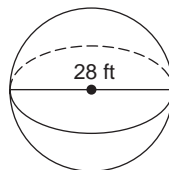
6.



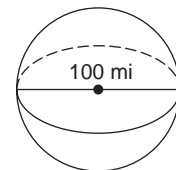
7.



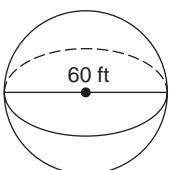
8.



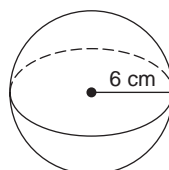
9.



10.



11.



12.

