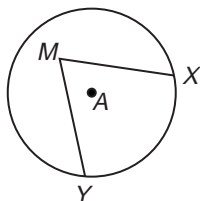


## Skills Practice

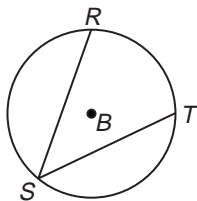
### Inscribed Angles

Determine whether each angle is an inscribed angle. Name the intercepted arc for the angle.

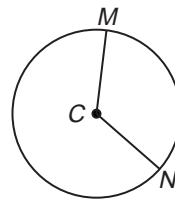
1.  $\angle XMY$



2.  $\angle RST$



3.  $\angle MCN$



Find each measure.

4.  $m\angle EDA$

5.  $m\widehat{DE}$

6.  $m\angle BDA$

7.  $m\angle BDE$

8.  $m\angle ZYW$

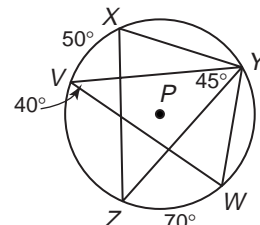
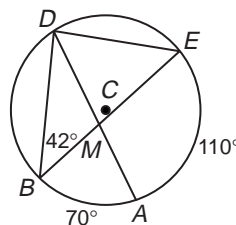
9.  $m\widehat{VZ}$

10.  $m\angle XYV$

11.  $m\widehat{WY}$

12.  $m\widehat{XY}$

13.  $m\angle XZY$

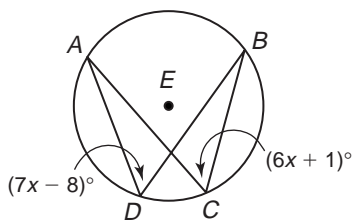


Exercises 4-7

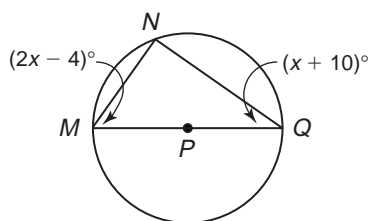
Exercises 8-13

Find the value of  $x$  in each circle.

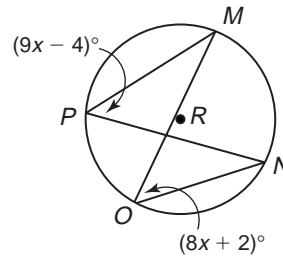
14.



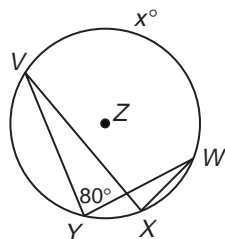
15.



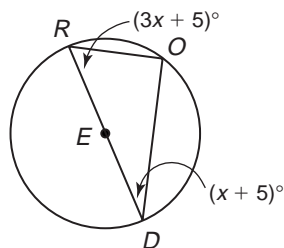
16.



17.



18.



19.

