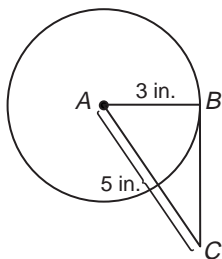


## Skills Practice

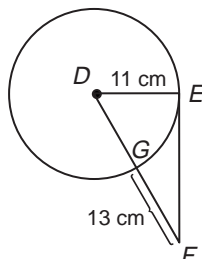
### Tangents to a Circle

Find each measure. Round to the nearest tenth if necessary. Assume segments that appear to be tangent are tangent.

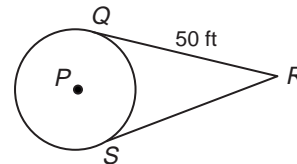
1.  $BC$



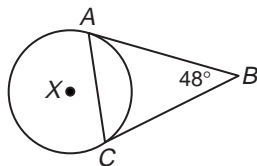
2.  $DF$



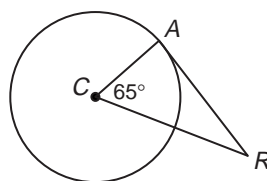
3.  $SR$



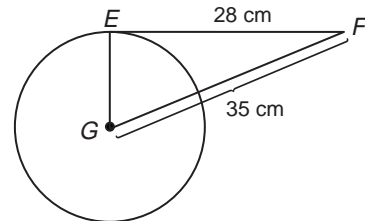
4.  $m\angle BAC$



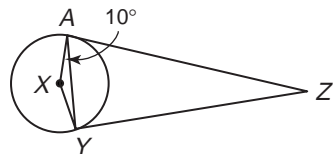
5.  $m\angle ARC$



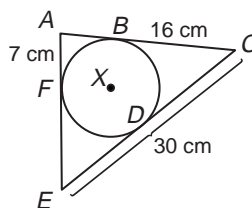
6.  $EG$



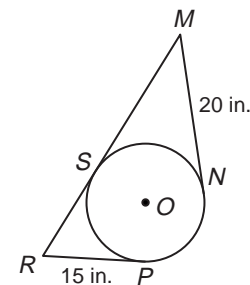
7.  $m\angle ZAY$



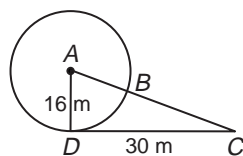
8.  $FE$



9.  $MR$



10.  $BC$



11.  $HG$



12.  $m\angle XZY$

