

Skills Practice

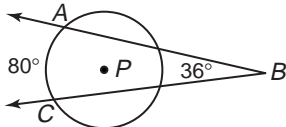
Secant Angles

Find each measure.

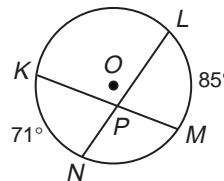
1. $m\angle EFB$



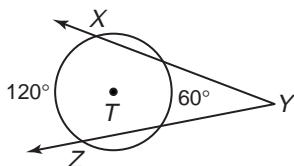
2. $m\angle ABC$



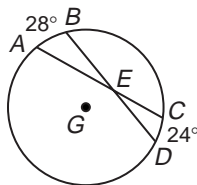
3. $m\angle LPM$



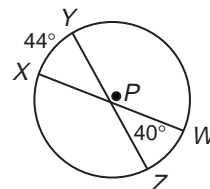
4. $m\angle XYZ$



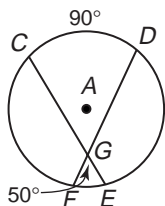
5. $m\angle CED$



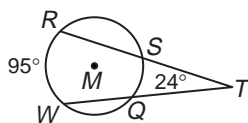
6. $m\widehat{WZ}$



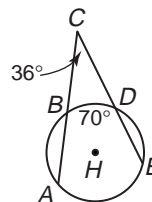
7. $m\widehat{FE}$



8. $m\widehat{SQ}$

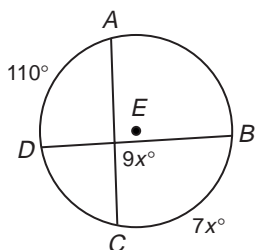


9. $m\widehat{AE}$

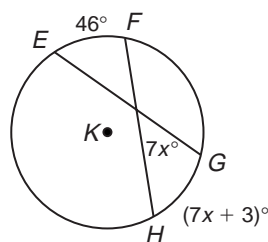


Find the value of x in each circle. Then find the given measure.

10. $m\widehat{BC}$



11. $m\widehat{HG}$



12. $m\widehat{JL}$

