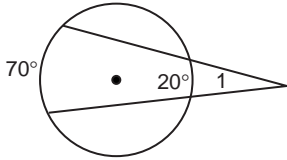


## Skills Practice

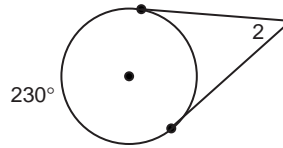
### Secant-Tangent Angles

Find the measure of each angle. Assume segments that appear to be tangent are tangent.

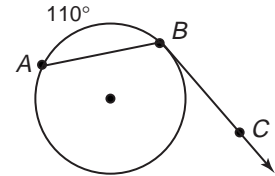
1.  $\angle 1$



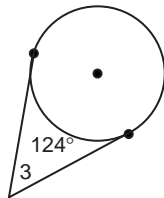
2.  $\angle 2$



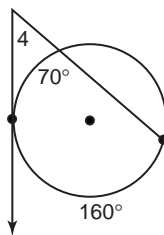
3.  $\angle ABC$



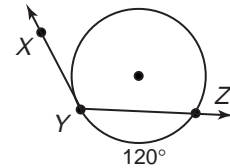
4.  $\angle 3$



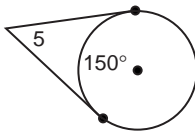
5.  $\angle 4$



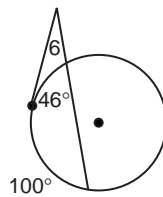
6.  $\angle XYZ$



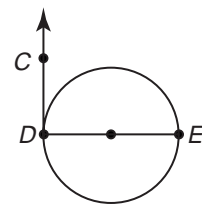
7.  $\angle 5$



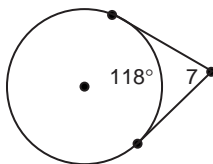
8.  $\angle 6$



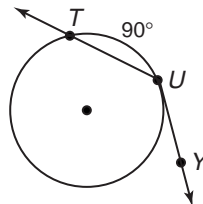
9.  $\angle CDE$



10.  $\angle 7$



11.  $\angle TUY$



12.  $\angle 8$

