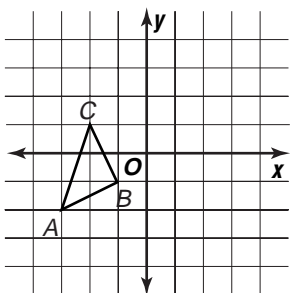


Skills Practice

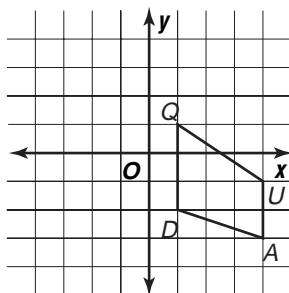
Translations

Find the coordinates of the vertices of each figure after the given translation. Then graph the translation image.

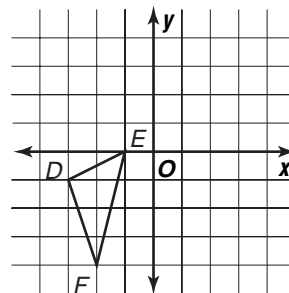
1. $(3, 4)$



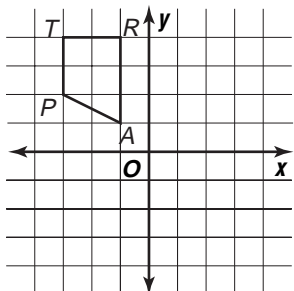
2. $(-2, 3)$



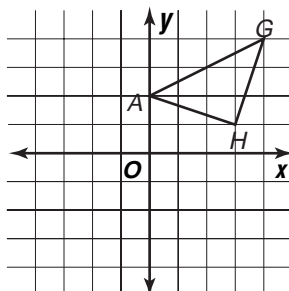
3. $(1, 5)$



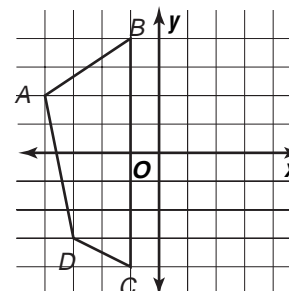
4. $(3, -2)$



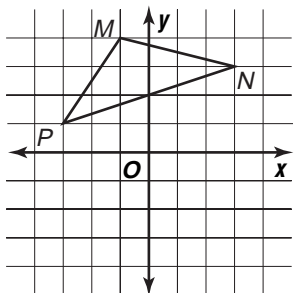
5. $(-3, -1)$



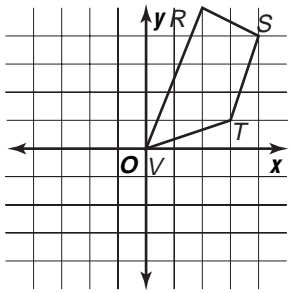
6. $(4, 0)$



7. $(0, -3)$



8. $(-2, -4)$



9. $(-5, 0)$

