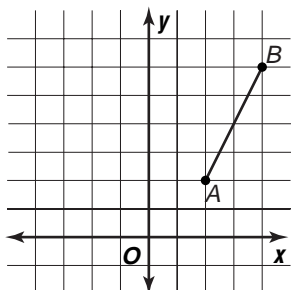


Skills Practice

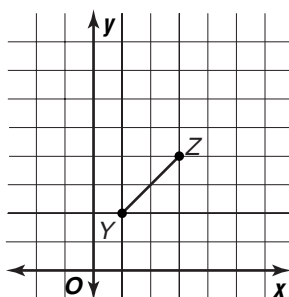
Dilations

Find the coordinates of the dilation image for the given scale factor k , and graph the dilation image.

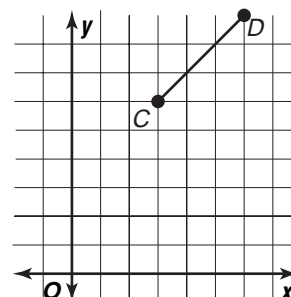
1. $\frac{1}{2}$



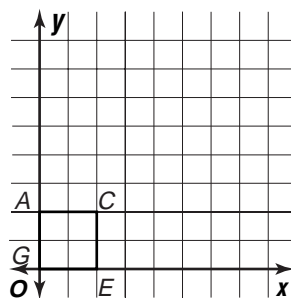
2. 2



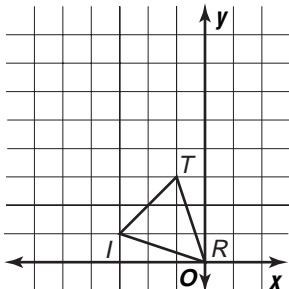
3. $\frac{1}{3}$



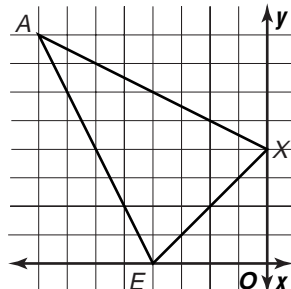
4. 4



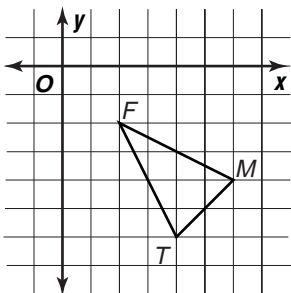
5. 2



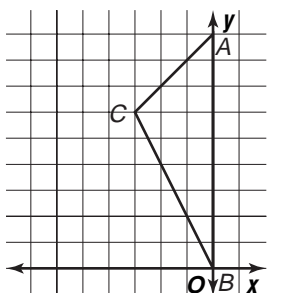
6. $\frac{1}{4}$



7. $\frac{1}{2}$



8. $\frac{2}{3}$



9. 2

