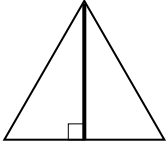


Skills Practice

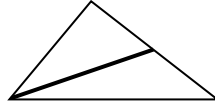
Altitudes and Perpendicular Bisectors

Tell whether the bold segment or line is an altitude, a perpendicular bisector, both, or neither.

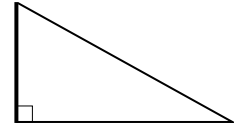
1.



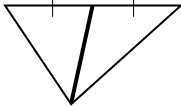
2.



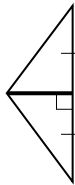
3.



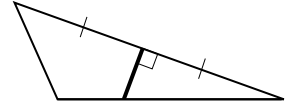
4.



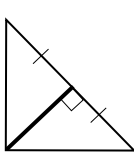
5.



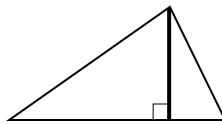
6.



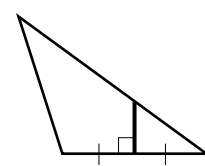
7.



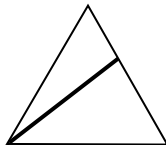
8.



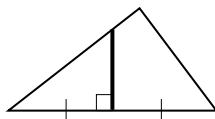
9.



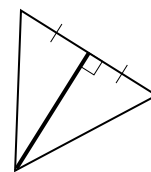
10.



11.



12.



Use the figure at the right.

13. Name a segment in the triangle that is an altitude. or

14. Name a segment in the triangle that is a perpendicular bisector.

14. Name a segment in the triangle that is not an altitude and is not a perpendicular bisector.

