


Skills Practice

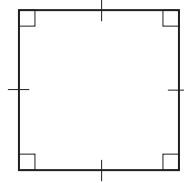
Rectangles, Rhombi, and Squares

Identify each parallelogram as a rectangle, rhombus, square, or none of these.

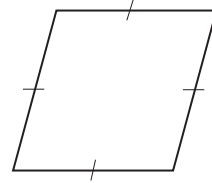
1.



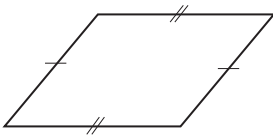
2.



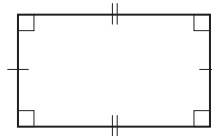
3.




4.



5.



6.



Find each measure.

7. BO

8. OC

9. AC

10. BD

11. $m\angle AOB$

12. $m\angle ABC$

13. $m\angle ADB$

14. $m\angle DCA$

15. MG

16. HF

17. $m\angle EHG$

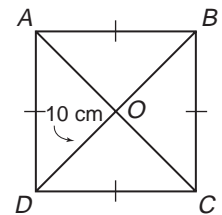
18. $m\angle FEH$

19. $m\angle EMF$

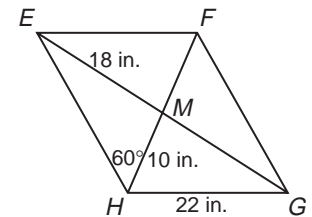
20. FG

21. EF

22. $m\angle FGE$



Exercises 7 - 14



Exercises 15 - 22